


YEAR 3

Reading Day 2

Tuesday



Lonely Hearts



Name: Professor Grampus

Occupation: Evil villain

Age: 55 years old

Profile:

Hi, where do I start? I suppose I should tell you about myself. I've known I was evil ever since I could walk. My first steps were towards my mother's ray-gun. I didn't get there, of course, but from that point, I was destined for greatness. Let's just say, the family cat didn't stick around once I could run!

One summer, I decided I'd had enough of my parents. It was only a matter of time before they found out my evil schemes, so I hatched a plan to destroy them. When I think back to the hours I spent in my hidden lair, under my cot, plotting their doom, I always smile. On some level, I suppose my mother must have known. She was always cleaning and tidying and saying what a little monster I was. My father even called me his partner-in-crime. The clues were there when I think about it.

I didn't destroy them in the end. They still live happily in a small cottage in Norfolk. I pop in whenever work allows. They are rather harmless in their old age, and my mother makes a cream tea as devilish as any of my schemes!

I really started my campaign to bring misery to the world in 2010 when I cancelled pancake day. Well, I say cancel. My arch-nemesis Captain Flabbypants was there to save the day, just like he always was. It was a close-run thing for a while. Those were the days.

Over the years, I've attempted many more fiendish campaigns. Each one has been designed to cause unhappiness around the world. Or to get rich. That's always good. Ever since Captain Flabbypants retired last year, things haven't been the same.

Maybe I'm jealous? He gets to spend his days sitting on the beach in Cornwall while I'm here trying to run an evil empire. Perhaps I just miss the chaos we would cause as we rampaged through the streets on one of our epic battles. It didn't matter that he won every time.

So, this is where you come in. I need somebody to step in and fill the Captain Flabbypants shaped void. Are you a virtuous, caring soul who'd sooner do the right thing than have fun? Do you know how to operate a standard-issue Light-Blast FreezeRay 3000? Can you fit into a size 60 cape (or do you know a good tailor)?

If you think you are worthy enough to take on one of the greatest criminal masterminds of all time (me), then get in touch. I can't wait to defeat you!

Reading Mission
30 mins

Children to read or be supported to read 'Lonely Hearts'.
After, they can answer these questions. These can be verbal answers or they could be written down or typed. Suggested answers are underneath.

VOCABULARY FOCUS

1. What does the word virtuous mean?
2. What does the word fiendish tell you about Professor Grumpus's plans?
3. Complete the sentence: Void is another word for _____ .
4. Find a word that has a meaning closest to "moved without control"
5. Which word tells you that Professor Grumpus came up with a plan?

VIPERS QUESTIONS

- I** Why did the cat run away?
- S** What was the first evil thing he tried to do?
- R** How old is Professor Grumpus?
- S** Why can't he fight Captain Flabbypants any more?
- I** Why might they need a tailor?

	<p>Answers:</p> <ol style="list-style-type: none">1. Good/honourable/does the right thing2. They were evil/unimaginable3. Hole/empty space4. Rampaged5. Hatched <p>I: It was scared of Professor Grumpus's pants</p> <p>S: Grab his mother's ray-gun</p> <p>R: 55 years old</p> <p>S: Captain Flabypants has retired</p> <p>I: To alter the cape to fit themselves</p>
Writing Mission 30 mins	Your writing mission is to correct the mistake in each sentence and write the sentence out in your best handwriting. The answers are underneath.

Answers

The spelling mistakes in these sentences have been circled. Write the correct spelling for each circled word in the box.

1. Put a full stop at the end of a sentents.
2. Jim managed to complet the game.
3. My favrite pie is apple and raspberry.
4. My gran is a very speshial person.
5. Perrhaps there was no one in when I knocked at the door.
6. The match will continyou in an hour.
7. Pete said he has had enouff now.
8. I got the anzer right!

sentence
complete
favourite
special
Perhaps
continue
enough
answer

Each sentence below has one word that is incorrect. Write the correct spelling of the word in the box.

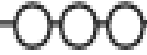
1. The dog had been very norty.
2. In a minit, the film will start.
3. The dentist asked me a questshun while he looked at my teeth.
4. The wimen were sitting at the bus stop chatting.
5. I was out of breaf after running up that hill.
6. The nurse delivered an inportant message.
7. The fairy godmother made the golden coach disapear in a puff of smoke.
8. I don't suppoze there are any more cakes left?

naughty
minute
question
women
breath
important
disappear
suppose

Maths
Mission
30 mins

Your mission today is to crack the code.

I can use multiplication facts to solve problems.



1. Can you use your maths detective skills to work out which numbers these symbols represent?

$$\text{Orange} = \square$$

$$\text{Pineapple} = \square$$

$$\text{Banana} = \square$$

$$\text{Apple} = \square$$

$$\text{Blackberries} = \square$$

$$\text{Strawberry} = \square$$

$$2 \times \text{Pineapple} = 10$$

$$\text{Pineapple} \times \text{Apple} = 20$$

$$\text{Apple} \times \text{Apple} = 16$$

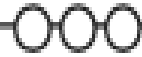
$$\text{Apple} \times 3 = \text{Orange}$$

$$\text{Orange} \div 2 = \text{Strawberry}$$


$$\text{Strawberry} \times \text{Apple} = \text{Blackberries}$$


2. Which fruit can't you work out from these facts?

I can use multiplication facts to solve problems.





1. Can you use your maths detective skills to work out which numbers these symbols represent?


 =

 =



 =



 =

 =

 =



6 ×  = 24

 ×  = 32

 ×  = 64

 ×  = 24

 ÷ 2 = 6

 ×  = 40

2. Which fruit can't you work out from these facts?

3. Are these coded number sentences correct? Mark them with a tick or cross.

$$\text{orange} \times \text{pineapple} = 48$$













$$\text{apple} \div \text{pineapple} = \text{blackberries}$$

$$\text{blackberries} \times \text{pineapple} = \text{orange}$$

Answers

1. Can you use your maths detective skills to work out which numbers these symbols











	=	<input type="text" value="12"/>		=	<input type="text" value="5"/>		=	<input type="text" value="N/A"/>
	=	<input type="text" value="4"/>		=	<input type="text" value="24"/>		=	<input type="text" value="6"/>

2	×		=	10
	×		=	20
	×		=	16
	×	3	=	
	÷	2	=	
	×		=	

2. Which fruit can't you work out from these facts?

1. Can you use your maths detective skills to work out which numbers these symbols

	=	<input type="text" value="12"/>		=	<input type="text" value="4"/>		=	<input type="text" value="N/A"/>
	=	<input type="text" value="8"/>		=	<input type="text" value="3"/>		=	<input type="text" value="5"/>

6	×		=	24
	×		=	32
	×		=	64
	×		=	24
	÷	2	=	6
	×		=	40

2. Which fruit can't you work out from these facts?

3. Are these coded number sentences correct? Mark them with a tick or cross.

$$\text{🍊} \times \text{🍍} = 48 \quad \checkmark$$

$$\text{🍏} \div \text{🍍} = \text{🍇} \quad \times$$

$$\text{🍇} \times \text{🍍} = \text{🍊} \quad \checkmark$$

Topic
Mission

Continued